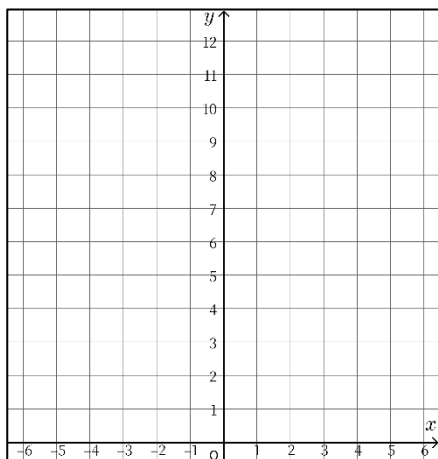


16. 式からグラフをかく①

1 グラフをかきなさい。

①

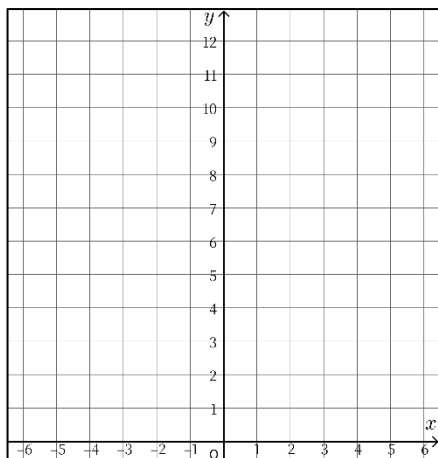
$$y = x^2$$



x	0	1	2	3	4	5	6
y							

②

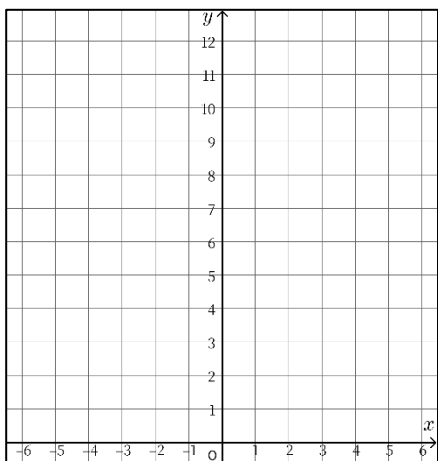
$$y = \frac{1}{2}x^2$$



x	0	1	2	3	4	5	6
y							

③

$$y = \frac{1}{4}x^2$$

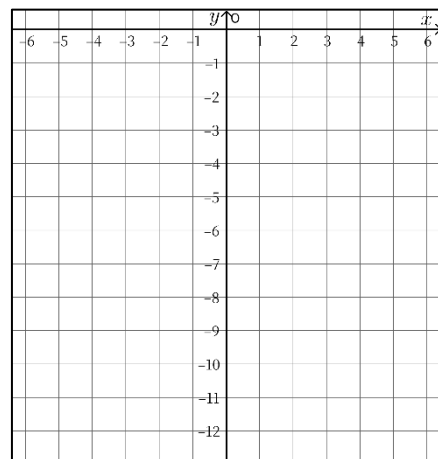


x	0	1	2	3	4	5	6
y							

2 グラフをかきなさい。

①

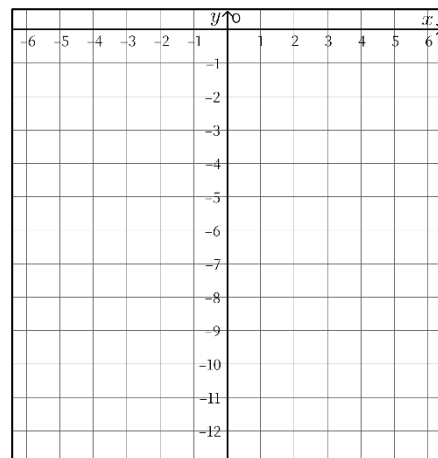
$$y = -x^2$$



x	0	1	2	3	4	5	6
y							

②

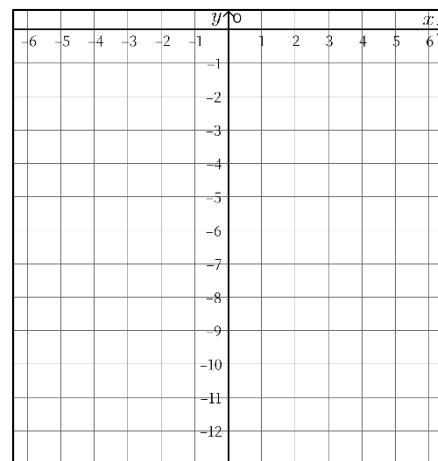
$$y = -\frac{1}{2}x^2$$



x	0	1	2	3	4	5	6
y							

③

$$y = -\frac{1}{4}x^2$$



x	0	1	2	3	4	5	6
y							