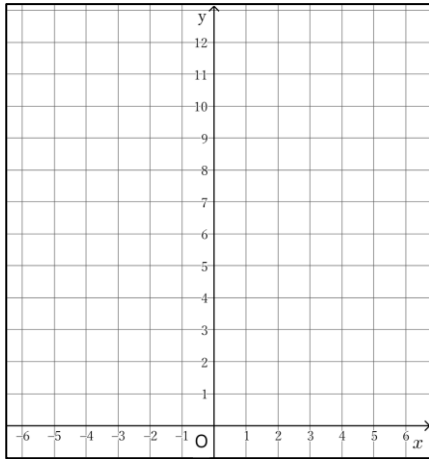


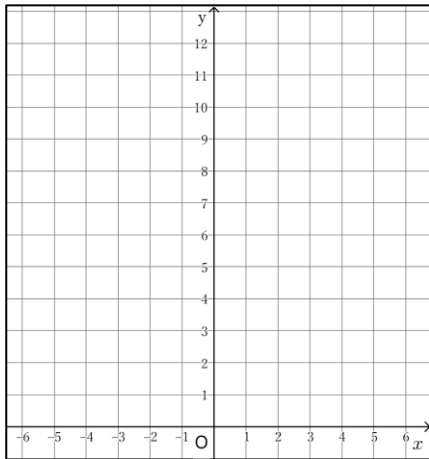
式からグラフをかく②

1 グラフをかきなさい。

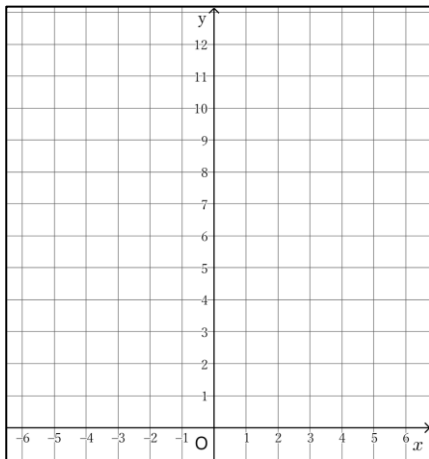
① $y = \frac{1}{2}x^2$



② $y = \frac{1}{4}x^2$

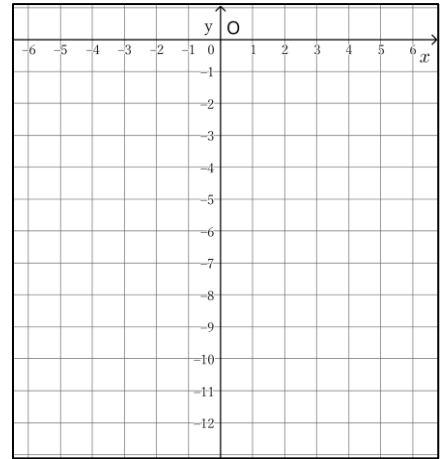


③ $y = \frac{1}{9}x^2$

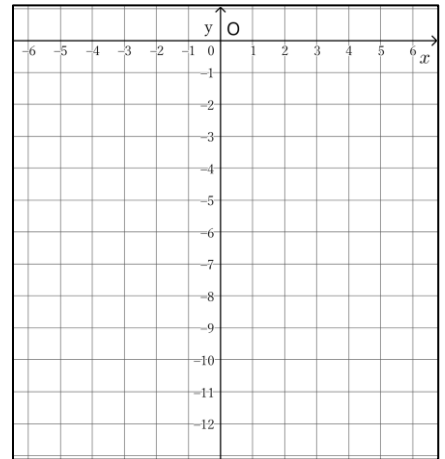


2 グラフをかきなさい。

① $y = -\frac{1}{3}x^2$



② $y = -\frac{3}{4}x^2$



③ $y = -\frac{2}{9}x^2$

